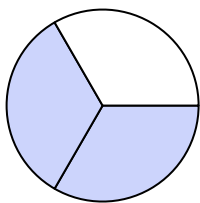





Write the shaded amount in word form.

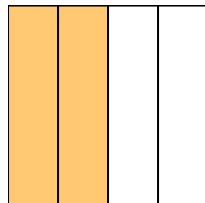
Ex)



1)



2)



Answers

Ex.

two-thirds

1.

2.

3.

4.

5.

6.

7.

8.

9.

10.


11.

12.


13.

14.

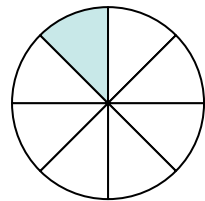
3)




4)




5)



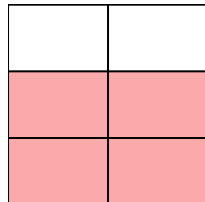
6)



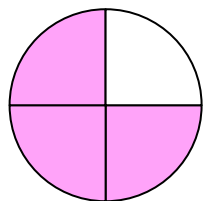
7)



8)



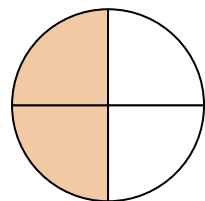
9)




10)



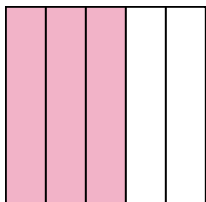
11)



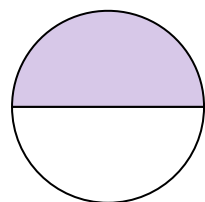
12)



13)



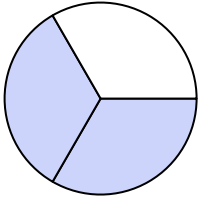
14)






Write the shaded amount in word form.

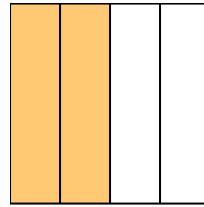
Ex)



1)




2)




- Answers**
- Ex. two-thirds
1. one-third
2. two-fourths
3. one-half
4. three-fifths
5. one-eighth
6. one-third
7. five-eighths
8. four-fifths
9. three-fourths
10. one-eighth
11. two-fourths
12. one-half
13. three-fifths
14. one-half

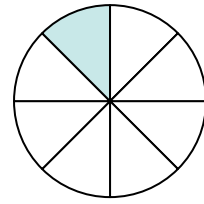
3)




4)




5)



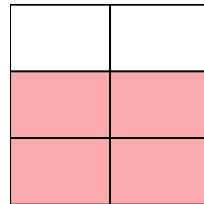
6)



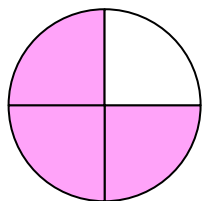
7)



8)



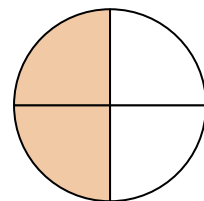
9)




10)



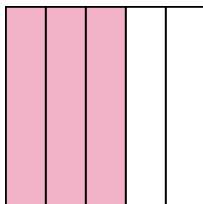
11)



12)



13)



14)

